

HEADTEACHER: Mr A.G. Neenan

Cross Lane, Great Barr, Birmingham, B43 6LN
Tel: 0121 357 3216 Fax: 0121 358 5523

email: headteacher@holynamesandwell.sch.uk
website: www.holynamesprimary.co.uk

"With Jesus as our guide; we love, live and learn together."

WEEKLY HOMEWORK LETTER

YEAR GROUP	3	NO.	4	DATE:	27.04.20
------------	---	-----	---	-------	----------

FOCUS	TASK(S)	GUIDANCE
ENGLISH	This week there will be 5 different activities to complete. Please use your homework book to complete these activities.	Complete daily activities in homework books, unless activity set in on www.purplemash.com
	Task One: Use pronouns to replace nouns. Complete English Activity Sheet One by rewriting the sentences and replacing the nouns in bold with the appropriate pronoun. The pronouns are listed at the top of the sheet. Watch this video for support before completing the activity: https://www.youtube.com/watch?v=4taCXFSzRzg (Subject Pronouns – Grammar Lessons for Grade 3)	For www.purplemash.com activity, find work set in 2Dos. For pronouns activity: They/them – replaces multiple people Her/she – replaces a girl Him/he – replaces a boy It – replaces and object
	Task Two: Reading Comprehension. Read 'Animal Boy Chapter One' and then complete 'Chapter One –Online Multiple Choice' 2Do on www.purplemash.com	For subordinate clauses: Subordinate clause – a clause that does not make sense on its own and includes a subordinating conjunction (while, when, if, before, unless, because) Main clause – a clause that makes sense on its own.
	Task Three: Use subordinate clauses. Complete English Activity Sheet Two by adding a main clause to each of the sentences. Your main clause should explain what happened. Watch this video for support before completing the activity: https://www.youtube.com/watch?v=pWS3Cbf5h9U (Major and Subordinate Clauses)	
	Task Four: Spelling Activity. Complete activity 'Spelling Quiz' 2Do on www.purplemash.com	
	Task Five: Describe a setting. Write a paragraph to describe the setting in the picture on English Activity Sheet Three. There are key words to help you.	
	MATHS	This week there will be 5 different activities related to multiplication and division to complete. These activities will be focusing on time. Please complete one activity per day.
	Task One: Mental multiplication. Complete 'Mixed Tables 3,4,6' Activity on www.mymaths.co.uk	
	Task Two: Mental multiplication. Complete Maths Activity Sheet One by multiplying all of the numbers in the wheels by the number at the centre.	
	Task Three: Division. Complete 'Dividing' activity on www.mymaths.co.uk	
	Task Four: Multiplication and division word problems. Complete Maths Activity Sheet Two by answering the word problems.	
	Task Five: Work out missing number multiplication and division problems. Complete Maths Activity Sheet Three by fill in the missing numbers in the multiplication/division triangles. You will need to use multiplication and division facts for the 3, 4 and 8 times tables. Watch this video for support before completing the activity: https://www.youtube.com/watch?v=XSnlVelSpcG0 (Multiplication	

	and Division Fact Triangles	
	There will also be 5 sessions on https://play.trockstars.com Please log in each day and complete one session.	
R.E.	<p>Research Jewish Passover using https://www.dkfindout.com/uk/more-find-out/festivals-and-holidays/passover/</p> <p>Find out:</p> <ul style="list-style-type: none"> • When did Jewish people celebrate the holiday of Passover? • How long did it last? • What did they do during this celebration? <p>Create your own 'Seder plate' compare this plate to the meal shared at the Last Supper (lamb, olives, bitter herbs, unleavened bread and wine)</p>	The Last Supper was celebrated during the Jewish Passover.
RESEARCH	<p>Science: Forces</p> <p>Where is gravity present?</p> <p>Watch the clip 'Defining Gravity: Crash Course Kids #4.1' https://www.youtube.com/watch?v=ljRIB6TuMOU</p> <p>Complete Research Activity Sheet by drawing downwards facing arrows to show which objects the force of gravity is pulling downwards.</p>	Gravity: A force that pulls an object towards the Earth.

Dear Year Three,

Thank you for all of your hard work at home- keep it up!
I hope you are enjoying the sunshine and spending time with your family. Mrs Slevin and I are missing your smiling faces very much and cannot wait to be back in school with you! 😊

Keep safe!

Miss Villers

Name: _____

Red Pirates



I can use words to replace nouns.

Look at these sentences and change the words in bold with one of the words in the brackets:

1 Jackie Starling hadn't always been a pirate. (they/she)

.....

2 Tom Starling was the innkeeper of the Blue Anchor Inn. (he/it)

.....

3 Jackie served the sailors with food and drink. (he/she) (they/them)

.....

4 The sailors told Jackie lots of wonderful stories about their adventures. (we/they) (him/her)

.....

5 The stranger had a tattoo. The tattoo was of a monkey. (he/him) (they/it)

.....

Extension

Words that replace nouns are called pronouns.
How many pronouns can you find in the passage?



English Activity Sheet Two:

1. Finish off the sentences by adding more detail to these **subordinate clauses**.

a) While the rain poured down, _____

b) Before the party had started, _____

c) Unless the bus arrives, _____

d) When you have finished your homework, _____

e) While the Christmas tree is up, _____



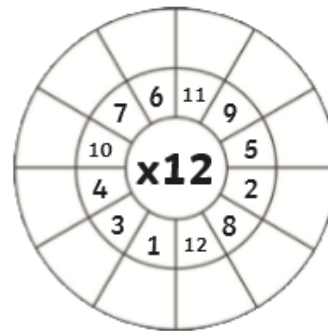
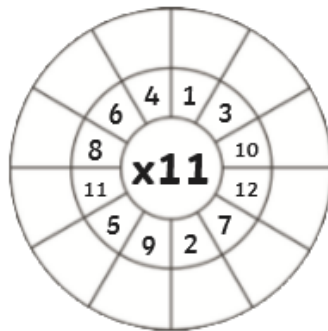
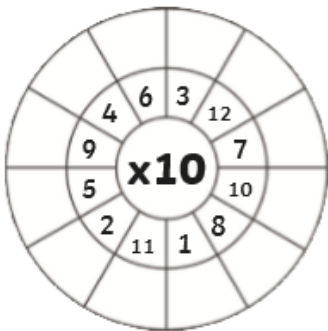
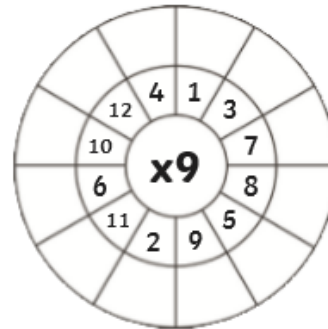
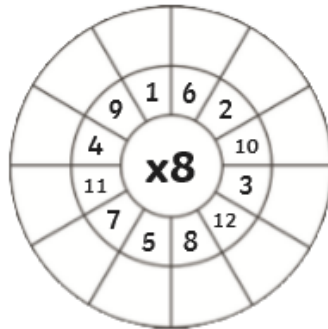
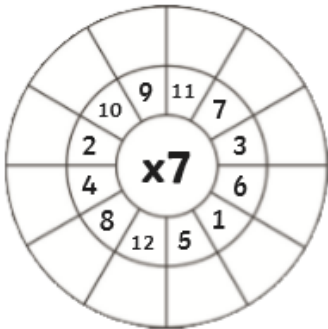
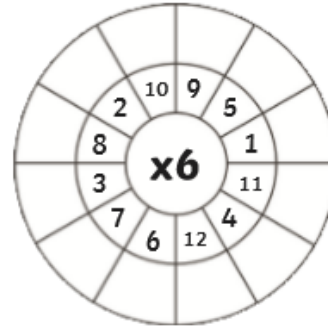
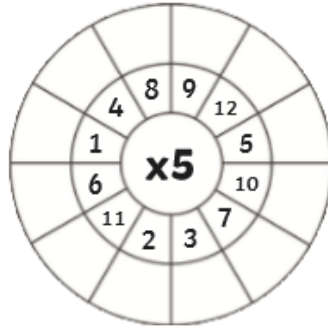
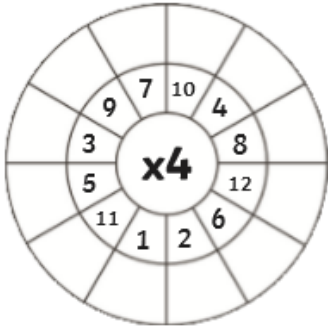
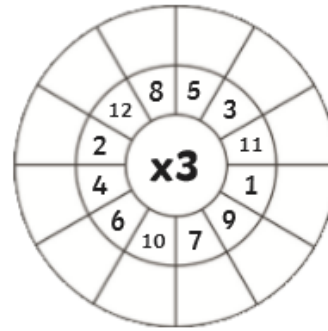
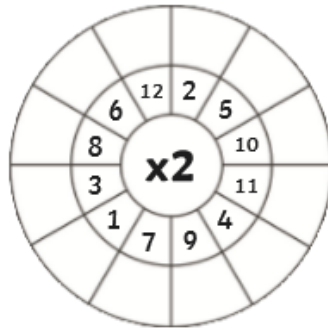
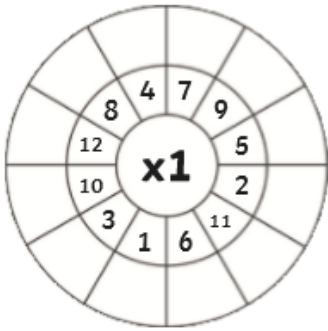


Key Words

spooky haunted gloomy
scary frightening
terrifying dark cold
dangerous mysterious
eerie lonely creepy foggy
misty


Maths Activity Sheet One

Multiply the numbers by the middle number.



Word Problems x3 x4 x8

1. How many wheels would 9 tricycles have?



2. 24 people travel to an airport in taxis. 4 people travel in each taxi. How many taxis are used?



3. Hanan is a keen archer. One day she shoots 5 arrows. Each arrow scores an 8. What is her total score?



4. Three judges award 27 marks overall. They each give the same score. What score did they each give?



5. Cinema tickets are £8. Six people go to see a film. How much will they pay altogether?



6. Cans of lemonade are sold in packs of 4. Cherie wants 36 cans for a party. How many packs should she buy?



7. Trish, Karen and Layla share equally a packet of nuts. There are 21 nuts in the pack. How many nuts do each get?



8. A machine making mango pieces puts 8 pieces in each snack packet. The machine makes 88 pieces in 1 minute. How many packets are filled every minute?

9. A carpenter makes tables. Some have 3 legs and some have 4 legs. He plans to make 5 tables with 3 legs, and 4 tables with 4 legs. How many legs will he need?



Maths Activity Sheet Three

Fill in the blanks in these multiplication triangles.

1.

$$\begin{array}{c} 80 \\ \div \quad \div \\ 8 \quad \times \quad \square \end{array}$$

2.

$$\begin{array}{c} \square \\ \div \quad \div \\ 4 \quad \times \quad 8 \end{array}$$

3.

$$\begin{array}{c} 12 \\ \div \quad \div \\ \square \quad \times \quad 3 \end{array}$$

4.

$$\begin{array}{c} 6 \\ \div \quad \div \\ 3 \quad \times \quad \square \end{array}$$

5.

$$\begin{array}{c} \square \\ \div \quad \div \\ 8 \quad \times \quad 2 \end{array}$$

6.

$$\begin{array}{c} 3 \\ \div \quad \div \\ \square \quad \times \quad 1 \end{array}$$

7.

$$\begin{array}{c} 20 \\ \div \quad \div \\ 4 \quad \times \quad \square \end{array}$$

8.

$$\begin{array}{c} \square \\ \div \quad \div \\ 4 \quad \times \quad 4 \end{array}$$

9.

$$\begin{array}{c} 24 \\ \div \quad \div \\ \square \quad \times \quad 3 \end{array}$$

10.

$$\begin{array}{c} 96 \\ \div \quad \div \\ 8 \quad \times \quad \square \end{array}$$

11.

$$\begin{array}{c} \square \\ \div \quad \div \\ 4 \quad \times \quad 7 \end{array}$$

12.

$$\begin{array}{c} 88 \\ \div \quad \div \\ \square \quad \times \quad 11 \end{array}$$

Research Activity Sheet

Draw downwards facing arrows to show which objects the force of gravity is pulling downwards.